

Please write clearly in block capitals.

Centre number

--	--	--	--	--

Candidate number

--	--	--	--

Surname

Forename(s)

Candidate signature

GCSE MATHEMATICS

F

Foundation Tier Paper 1 Non-Calculator

Thursday 24 May 2018

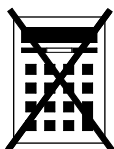
Morning

Time allowed: 1 hour 30 minutes

Materials

For this paper you must have:

- mathematical instruments



You must **not** use a calculator.

Instructions

- Use black ink or black ball-point pen. Draw diagrams in pencil.
- Fill in the boxes at the top of this page.
- Answer **all** questions.
- You must answer the questions in the spaces provided. Do not write outside the box around each page or on blank pages.
- Do all rough work in this book. Cross through any work you do not want to be marked.

Information

- The marks for questions are shown in brackets.
- The maximum mark for this paper is 80.
- You may ask for graph paper, tracing paper and more answer paper. These must be tagged securely to this answer book.

For Examiner's Use

Pages	Mark
2–3	
4–5	
6–7	
8–9	
10–11	
12–13	
14–15	
16–17	
18–19	
20–21	
22–23	
24–25	
TOTAL	

Advice

- In all calculations, show clearly how you work out your answer.



J U N 1 8 8 3 0 0 1 F 0 1

Answer **all** questions in the spaces provided

1 Work out $\frac{1}{2} \times 5$

Circle your answer.

[1 mark]

$\frac{5}{10}$

$2\frac{1}{2}$

$\frac{1}{10}$

$2\frac{1}{5}$

2 Circle the number that is 5 **less** than -2

[1 mark] -10 -7 -3

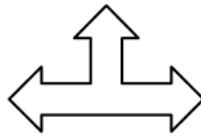
3

3 Simplify $3 \times a \times 3 \times a$

Circle your answer.

[1 mark] $9a$ $6a^2$ $9a^2$ $6a$ 

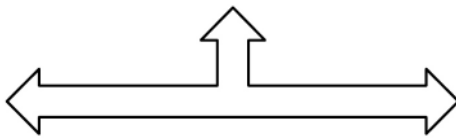
4 Which shape is **similar** to shape X?



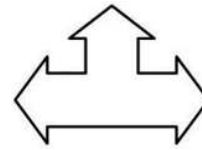
X

Circle the correct letter.

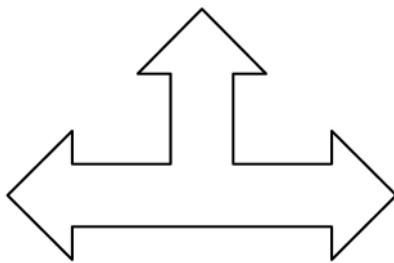
[1 mark]



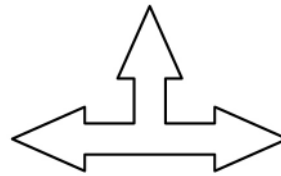
A



B



C



D



5 Work out 20% of 14 000

[2 marks]

Answer _____

6 (a) Write 0.85 as a fraction in its simplest form.

[2 marks]

Answer _____

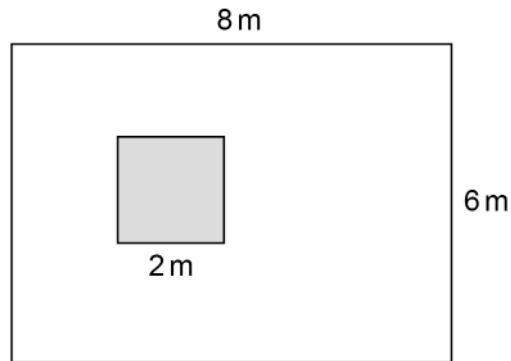
6 (b) Write $\frac{5}{8}$ as a decimal.

[1 mark]

Answer _____



- 7 A rectangular carpet measures 8 m by 6 m
Part of the carpet is covered by a square rug of length 2 m



Not drawn
accurately

Show that $\frac{1}{12}$ of the carpet is covered by the rug.

[2 marks]



8 Sam, Carl and Erik share 40 sweets.

Erik gets the largest share.

What is the **smallest** possible number of sweets that Erik could get?

[2 marks]

Answer _____

9 The time in Rio is three hours behind London.

The time in New York is five hours behind London.

What is the time in New York when it is 1.00 am in Rio?

[2 marks]

Answer _____



10 Here is a list of numbers.

5 6 1 3 5 5 8 4 2 2

10 (a) Work out the median.

[2 marks]

Answer _____

10 (b) Work out the mean.

[2 marks]

Answer _____

Turn over for the next question



12 (a) Work out $16.4 - 3.92 + 7.8$

[2 marks]

Answer _____

12 (b) Work out $2843.61 \div 7$

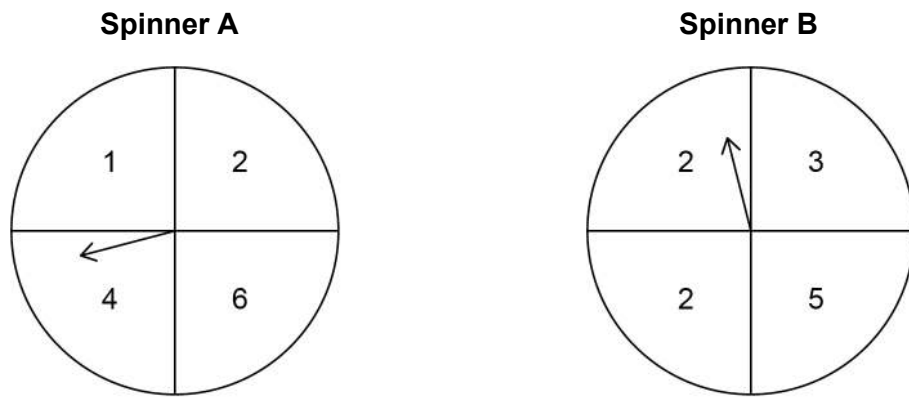
[2 marks]

Answer _____

Turn over for the next question



- 13 In a game, two fair spinners are spun.



If the numbers the arrows land on are different, the score is the **higher** number.
If the numbers the arrows land on are the same, the score is 0

- 13 (a) Complete the table to show the possible scores.

[2 marks]

		Spinner B			
		2	2	3	5
Spinner A	1	2			
	2		0		
	4				
	6				

- 13 (b) Write down the probability that the score is an **odd** number.

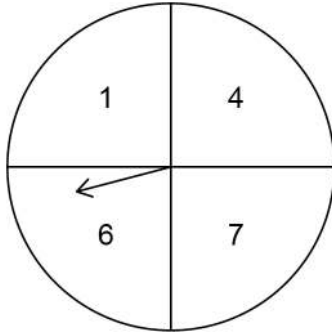
[1 mark]

Answer _____

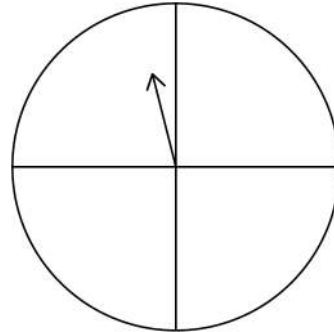


- 13 (c) The same game is played using spinners C and D.
The numbers on C are shown.

Spinner C



Spinner D



The table shows some of the possible scores.

Spinner C	1	4		
	4		0	
	6			
	7		0	8

Write the missing numbers on spinner D.

[2 marks]

5

Turn over ►



14 2 people working at the same rate will take 6 hours to paint a room.

14 (a) Assuming that they **all** work at this rate,
how long will it take 3 people to paint the room?

[2 marks]

Answer _____ hours

14 (b) In fact, the **third** person works at a faster rate.
How does this affect the time to paint the room?

[1 mark]



15 $3a + b = 7$ and $6x + 8y = 40$

Show that $9a + 3b$ has a **greater** value than $3x + 4y$

[2 marks]

Turn over for the next question



16 Circle the point that lies on the line $x - 3 = 0$ **[1 mark]**

(3, 0)

(0, 3)

(-3, 0)

(0, -3)

17 a is a negative odd number.

Circle the words that describe a^2

[1 mark]

negative and odd

negative and even

positive and odd

positive and even

18 Circle the ratio which is the same as the scale 1 cm represents 1 km **[1 mark]**

1 : 100

1 : 1000

1 : 10 000

1 : 100 000



19 Circle the percentage that is closest in value to $\frac{1}{3}$ [1 mark]

30%

33%

33.3%

33.4%

20 Work out $\sqrt{121} - (13 - 5 \times 2)^2$ [3 marks]

Answer _____

Turn over for the next question

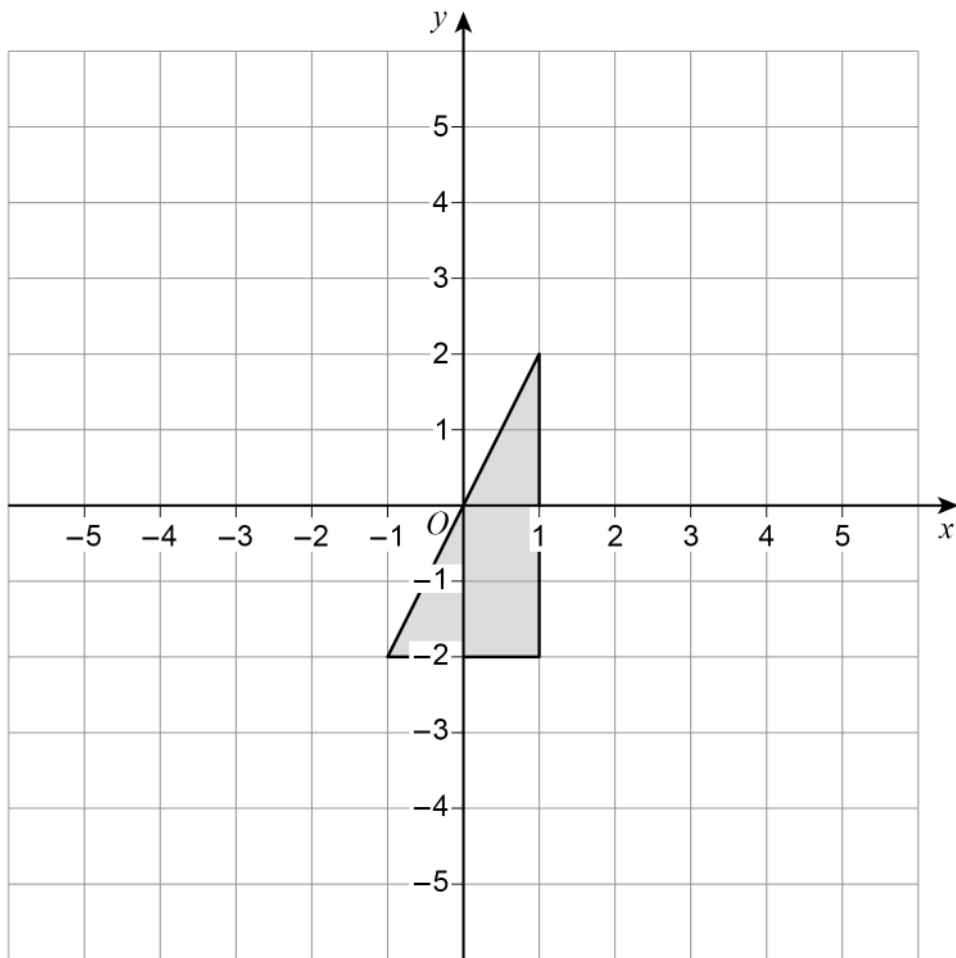
7

Turn over ►



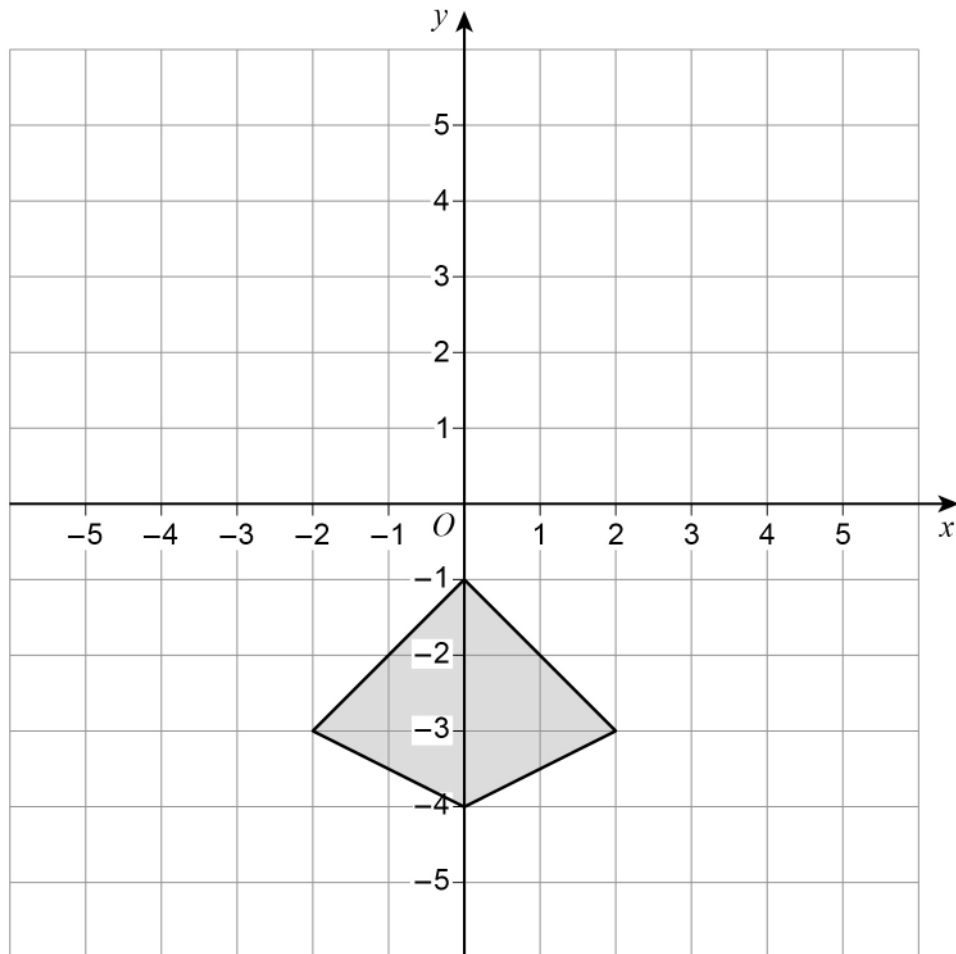
21 (a) Reflect the triangle in the line $x = 2$

[2 marks]



21 (b) Rotate the kite 90° anticlockwise about $(0, 0)$

[2 marks]



Turn over for the next question

Turn over ►

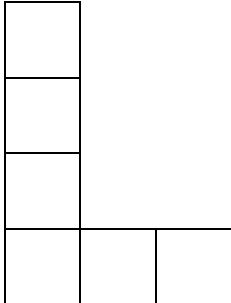


23

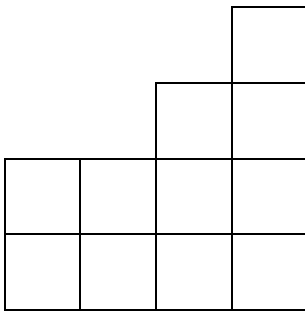
A solid shape is made from centimetre cubes.

Here are the plan, side elevation and front elevation of the shape.

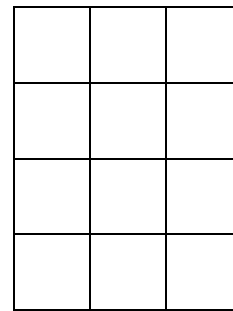
Plan



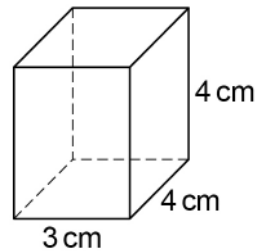
Side elevation



Front elevation



Centimetre cubes are added to make this cuboid.



How many cubes are added?

[3 marks]

Answer _____

6

Turn over ►



24 Divide 405 in the ratio 4 : 11

[3 marks]

Answer _____ and _____

25 The height of Zak is 1.86 metres.
The height of Fred is 1.6 metres.

Write the height of Zak as a fraction of the height of Fred.
Give your answer in its simplest form.

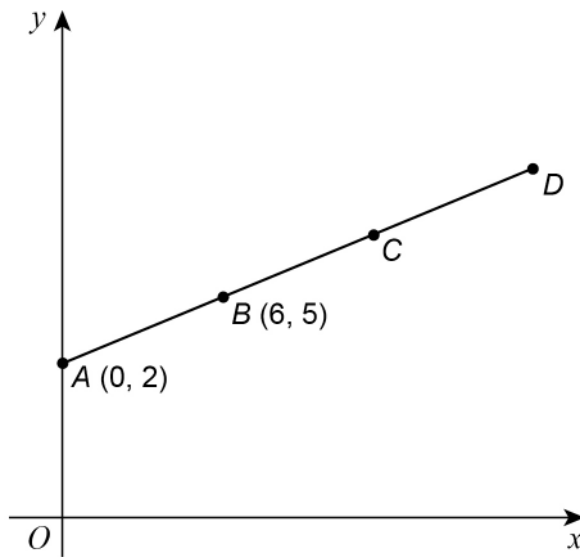
[3 marks]

Answer _____



26

$A(0, 2)$ and $B(6, 5)$ are points on the straight line $ABCD$.



Not drawn
accurately

$$AB = BC = CD$$

Work out the coordinates of D .

[3 marks]

Answer (_____ , _____)

Turn over for the next question

Turn over ►



27 A coin is thrown 50 times.
It lands on heads 31 times.

27 (a) Write down the relative frequency it lands on heads.

[1 mark]

Answer _____

27 (b) Raj says,
“The coin is biased towards heads.”
Use the data to give a reason why he might be correct.

[1 mark]

28 Solve $5(x + 3) < 60$

[2 marks]

Answer _____



29 The range of a set of numbers is $15\frac{1}{4}$

The smallest number is $-2\frac{7}{8}$

Work out the largest number.

[3 marks]

Answer _____

30 y is inversely proportional to x .

Complete the table.

[2 marks]

x	12	6	
y		4	8

Turn over for the next question



- 31 A large rectangle is made by joining three identical small rectangles as shown.



Not drawn
accurately

The perimeter of one small rectangle is 15 cm

Work out the perimeter of the large rectangle.

[4 marks]

Answer _____ cm



32 Put these numbers in order from smallest to largest.

8×10^{-4}

4×10^{-2}

6×10^{-4}

0.07

[2 marks]

Smallest _____

Largest _____

END OF QUESTIONS

There are no questions printed on this page

*Do not write
outside the
box*

**DO NOT WRITE ON THIS PAGE
ANSWER IN THE SPACES PROVIDED**



There are no questions printed on this page

*Do not write
outside the
box*

**DO NOT WRITE ON THIS PAGE
ANSWER IN THE SPACES PROVIDED**



There are no questions printed on this page

*Do not write
outside the
box*

**DO NOT WRITE ON THIS PAGE
ANSWER IN THE SPACES PROVIDED**

Copyright information

For confidentiality purposes, from the November 2015 examination series, acknowledgements of third party copyright material will be published in a separate booklet rather than including them on the examination paper or support materials. This booklet is published after each examination series and is available for free download from www.aqa.org.uk after the live examination series.

Permission to reproduce all copyright material has been applied for. In some cases, efforts to contact copyright-holders may have been unsuccessful and AQA will be happy to rectify any omissions of acknowledgements. If you have any queries please contact the Copyright Team, AQA, Stag Hill House, Guildford, GU2 7XJ.

Copyright © 2018 AQA and its licensors. All rights reserved.

